


Music vocabulary

1. Notes and octave names

Treble clef

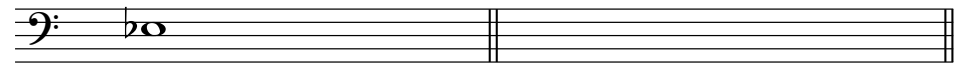
- a) Write the name of the note (i.e. c2, g#3, Db1) b) Notate the given note below



_____ d_b^2

Bass clef

- c) Write the name of the note (i.e. c2, g#3, Db1) d) Notate the given note below




_____ G#

2. Interval

Treble clef

- a) Write the name of the interval below. (i.e. m3, P5) b) Notate the interval below.



_____ P5 (perfect 5th) **downwards**

Bass clef

- c) Write in the name of the Interval (i.e. M3, P5, m7) d) Notate the interval given below.




_____ m3 (minor third) **upwards**

3. Key signature


Treble clef

- a) Write which major key has the key signature below b) Write the key signature for F major below



Bass clef

- c) Write which minor key has this key signature d) Write key signature for D-minor below



4. Time signatures

Write in the time signature for each measure (i.e. $\frac{2}{4}$ $\frac{3}{8}$)



5. Note lengths and rests

a) Complete the measures by adding **one note only**

b) Complete the measures by adding **only one rest**



6. Chords

a) Write the name of the chord on the line below the system

b) Notate the chords below the system as the previous two chords

Dm⁷(b5)

G⁷(b9)